

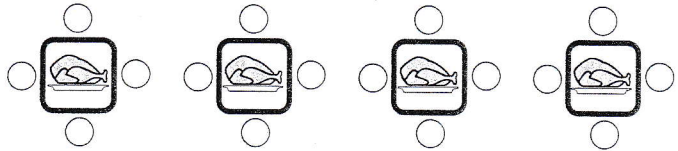
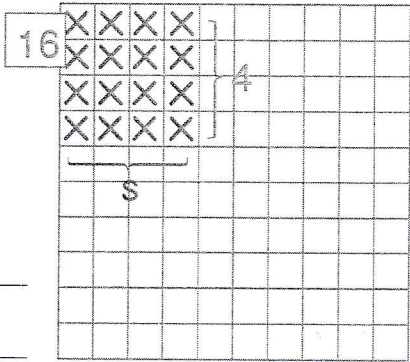
## Dělení číslem 4

16 dětí se posadilo ke 4 stolům.  
Kolik dětí sedělo u každého stolu?

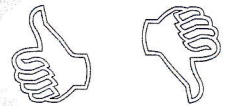
děti \_\_\_\_\_

stolů \_\_\_\_\_

u každého stolu \_\_\_\_\_



- 8 · 4 = \_\_\_\_
- 4 · 4 = \_\_\_\_
- 2 · 8 = \_\_\_\_
- 10 · 3 = \_\_\_\_
- 8 · 0 = \_\_\_\_
- 7 · 4 = \_\_\_\_
- 8 · 3 = \_\_\_\_
- 2 · 6 = \_\_\_\_
- 4 · 2 = \_\_\_\_
- 1 · 5 = \_\_\_\_
- 3 · 6 = \_\_\_\_
- 6 · 4 = \_\_\_\_



**1** Vypočítej

**2** Doplň správně tabulky

4 : 4 = ____
8 : 4 = ____
12 : 4 = ____
16 : 4 = ____
20 : 4 = ____
24 : 4 = ____
28 : 4 = ____
32 : 4 = ____
36 : 4 = ____
40 : 4 = ____

t	t · 4	r	r : 4
5		20	
2		32	
6		16	
8		36	
0		8	
3		24	
7		40	
4		4	
1		12	

- 2 · 2 = \_\_\_\_
- 0 · 10 = \_\_\_\_
- 4 · 3 = \_\_\_\_
- 2 · 10 = \_\_\_\_
- 9 · 4 = \_\_\_\_
- 3 · 4 = \_\_\_\_
- 4 · 5 = \_\_\_\_
- 3 · 1 = \_\_\_\_
- 4 · 2 = \_\_\_\_
- 10 · 4 = \_\_\_\_
- 3 · 2 = \_\_\_\_
- 4 · 1 = \_\_\_\_

